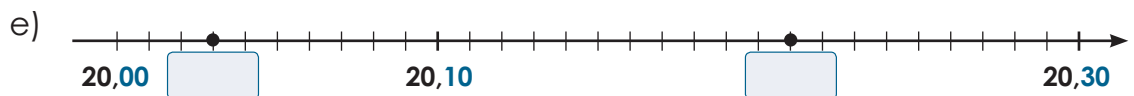
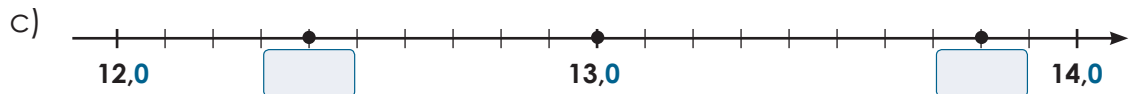
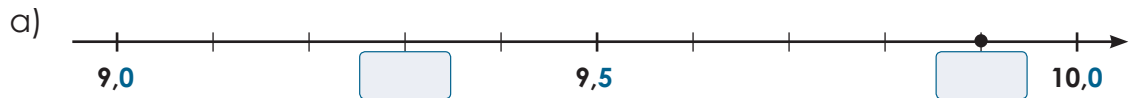


Situer des nombres décimaux sur une droite numérique

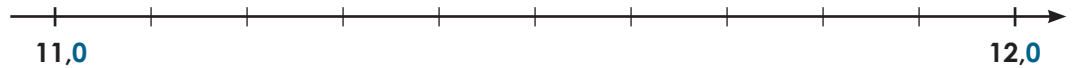
1. Écris les nombres représentés par les points.



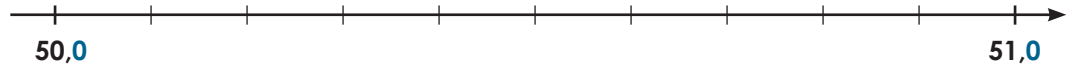
Situer des nombres décimaux sur une droite numérique (suite)

2. Place les nombres sur la droite.

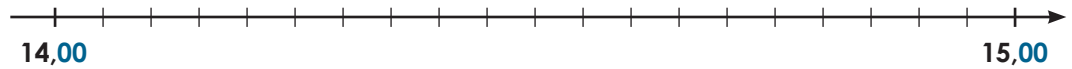
a) 11,5 11,9



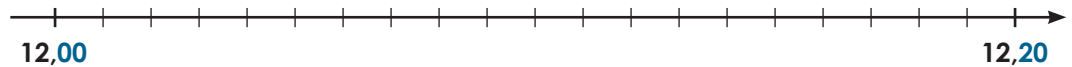
b) 50,2 50,6



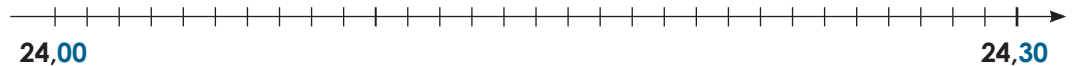
c) 14,25 14,5



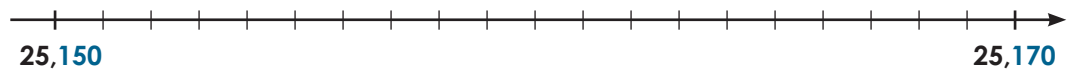
d) 12,05 12,17



e) 24,08 24,26



f) 25,154 25,168



g) 9,010 9,015

