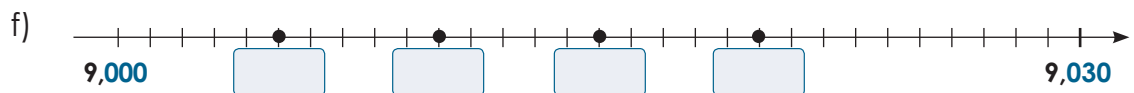
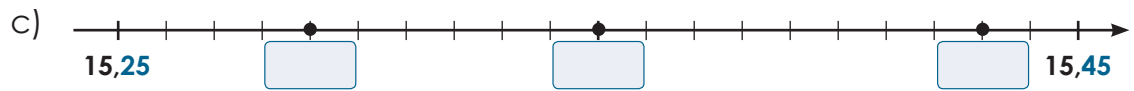
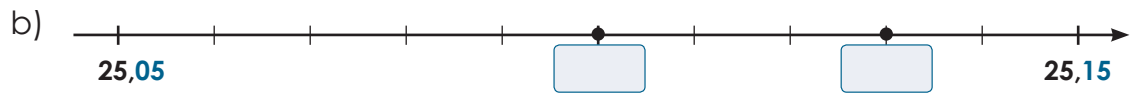
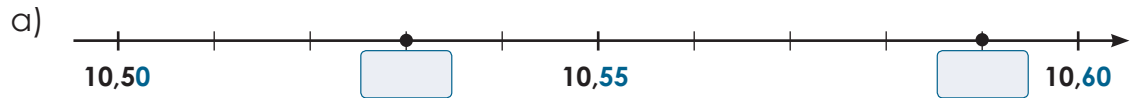


## Situer des nombres décimaux sur une droite numérique

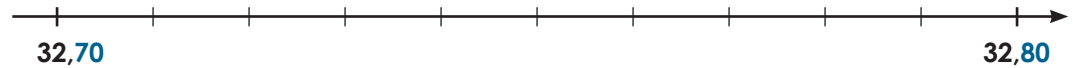
1. Écris les nombres représentés par les points.



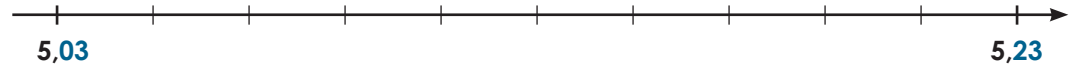
## Situer des nombres décimaux sur une droite numérique (suite)

2. Place les nombres sur la droite.

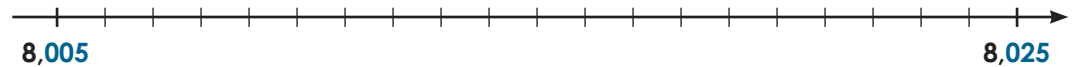
a) 32,72 32,75 32,77 32,79



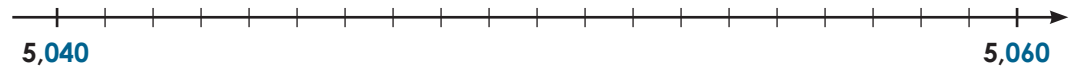
b) 5,05 5,09 5,15 5,20



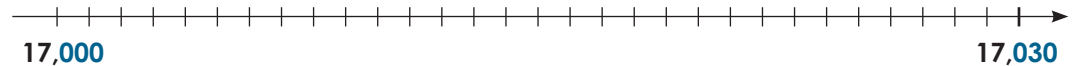
c) 8,007 8,010 8,015 8,02



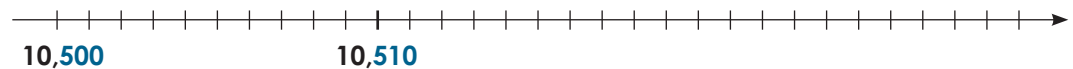
d) 5,041 5,045 5,05 5,058



e) 17,002 17,010 17,015 17,029



f) 10,502 10,504 10,520 10,530



g) 20,003 20,009 20,014 20,018

